


# 11+ Complete Exam Practice Pack



This booklet contains 4 full sections of 50 questions each:

- Maths
- Verbal Reasoning
- Non-Verbal Reasoning
- English

Use the space provided for working and answering. Time yourself realistically. Good luck!

## Section 1: Maths

Q10. What is  $51 + 57$ ?

Q10. What is  $23 - 5$ ?

Q10. Multiply:  $2 \times 4$

Q10. Divide:  $73 \div 2$

Q10. A rectangle has sides 4cm and 10cm. What is its area?

Q10. What is  $51 + 57$ ?

Q10. What is  $23 - 5$ ?

Q10. Multiply:  $2 \times 4$

Q10. Divide:  $73 \div 2$

Q10. A rectangle has sides 4cm and 10cm. What is its area?

Q10. What is  $51 + 57$ ?

Q10. What is  $23 - 5$ ?

Q10. Multiply:  $2 \times 4$

Q10. Divide:  $73 \div 2$

Q10. A rectangle has sides 4cm and 10cm. What is its area?

Q10. What is  $51 + 57$ ?

Q10. What is  $23 - 5$ ?

Q10. Multiply:  $2 \times 4$

Q10. Divide:  $73 \div 2$

Q10. A rectangle has sides 4cm and 10cm. What is its area?

Q10. What is  $51 + 57$ ?

Q10. What is  $23 - 5$ ?

Q10. Multiply:  $2 \times 4$

Q10. Divide:  $73 \div 2$

Q10. A rectangle has sides 4cm and 10cm. What is its area?

Q10. What is  $51 + 57$ ?

Q10. What is  $23 - 5$ ?

Q10. Multiply:  $2 \times 4$

Q10. Divide:  $73 \div 2$

Q10. A rectangle has sides 4cm and 10cm. What is its area?

Q10. What is  $51 + 57$ ?

Q10. What is  $23 - 5$ ?

Q10. Multiply:  $2 \times 4$

Q10. Divide:  $73 \div 2$

Q10. A rectangle has sides 4cm and 10cm. What is its area?

Q10. What is  $51 + 57$ ?

Q10. What is  $23 - 5$ ?

Q10. Multiply:  $2 \times 4$

Q10. Divide:  $73 \div 2$

Q10. A rectangle has sides 4cm and 10cm. What is its area?

Q10. What is  $51 + 57$ ?

Q10. What is  $23 - 5$ ?

Q10. Multiply:  $2 \times 4$

Q10. Divide:  $73 \div 2$

Q10. A rectangle has sides 4cm and 10cm. What is its area?

Q10. What is  $51 + 57$ ?

Q10. What is  $23 - 5$ ?

Q10. Multiply:  $2 \times 4$

Q10. Divide:  $73 \div 2$

Q10. A rectangle has sides 4cm and 10cm. What is its area?

## Section 2: Verbal Reasoning

Q10. Choose the word that is most similar in meaning to 'tired'

Q10. Which word does not belong: grape, banana, apple, carrot?

Q10. Find the odd one out: television, chair, desk, sofa

Q10. What comes next in the sequence: 9, 10, 11, 12?

Q10. Unscramble the word: palten

Q10. Choose the word that is most similar in meaning to 'tired'

Q10. Which word does not belong: grape, banana, apple, carrot?

Q10. Find the odd one out: television, chair, desk, sofa

Q10. What comes next in the sequence: 9, 10, 11, 12?

Q10. Unscramble the word: palten

Q10. Choose the word that is most similar in meaning to 'tired'

Q10. Which word does not belong: grape, banana, apple, carrot?

Q10. Find the odd one out: television, chair, desk, sofa

Q10. What comes next in the sequence: 9, 10, 11, 12?

Q10. Unscramble the word: palten

Q10. Choose the word that is most similar in meaning to 'tired'

Q10. Which word does not belong: grape, banana, apple, carrot?

Q10. Find the odd one out: television, chair, desk, sofa

Q10. What comes next in the sequence: 9, 10, 11, 12?

Q10. Unscramble the word: palten

Q10. Choose the word that is most similar in meaning to 'tired'

Q10. Which word does not belong: grape, banana, apple, carrot?

Q10. Find the odd one out: television, chair, desk, sofa

Q10. What comes next in the sequence: 9, 10, 11, 12?

Q10. Unscramble the word: palten

Q10. Choose the word that is most similar in meaning to 'tired'

Q10. Which word does not belong: grape, banana, apple, carrot?

Q10. Find the odd one out: television, chair, desk, sofa

Q10. What comes next in the sequence: 9, 10, 11, 12?

Q10. Unscramble the word: palten

Q10. Choose the word that is most similar in meaning to 'tired'

Q10. Which word does not belong: grape, banana, apple, carrot?

Q10. Find the odd one out: television, chair, desk, sofa

Q10. What comes next in the sequence: 9, 10, 11, 12?

Q10. Unscramble the word: palten

Q10. Choose the word that is most similar in meaning to 'tired'

Q10. Which word does not belong: grape, banana, apple, carrot?

Q10. Find the odd one out: television, chair, desk, sofa

Q10. What comes next in the sequence: 9, 10, 11, 12?

Q10. Unscramble the word: palten

Q10. Choose the word that is most similar in meaning to 'tired'

Q10. Which word does not belong: grape, banana, apple, carrot?

Q10. Find the odd one out: television, chair, desk, sofa

Q10. What comes next in the sequence: 9, 10, 11, 12?

Q10. Unscramble the word: palten

Q10. Choose the word that is most similar in meaning to 'tired'

Q10. Which word does not belong: grape, banana, apple, carrot?

Q10. Find the odd one out: television, chair, desk, sofa

Q10. What comes next in the sequence: 9, 10, 11, 12?

Q10. Unscramble the word: palten

## Section 4: English

Q10. Read the sentence and identify the noun: 'The cat ran quickly to school.'

Q10. Which word is a verb in the sentence: 'She jumped to the shop'?

Q10. Choose the correct synonym for 'fast'

Q10. Add punctuation: 'what time is it'

Q10. Write a sentence using the word 'because'

Q10. Read the sentence and identify the noun: 'The cat ran quickly to school.'

Q10. Which word is a verb in the sentence: 'She jumped to the shop'?

Q10. Choose the correct synonym for 'fast'

Q10. Add punctuation: 'what time is it'

Q10. Write a sentence using the word 'because'

Q10. Read the sentence and identify the noun: 'The cat ran quickly to school.'

Q10. Which word is a verb in the sentence: 'She jumped to the shop'?

Q10. Choose the correct synonym for 'fast'

Q10. Add punctuation: 'what time is it'

Q10. Write a sentence using the word 'because'

Q10. Read the sentence and identify the noun: 'The cat ran quickly to school.'

Q10. Which word is a verb in the sentence: 'She jumped to the shop'?

Q10. Choose the correct synonym for 'fast'

Q10. Add punctuation: 'what time is it'

Q10. Write a sentence using the word 'because'

Q10. Read the sentence and identify the noun: 'The cat ran quickly to school.'

Q10. Which word is a verb in the sentence: 'She jumped to the shop'?

Q10. Choose the correct synonym for 'fast'

Q10. Add punctuation: 'what time is it'

Q10. Write a sentence using the word 'because'

Q10. Read the sentence and identify the noun: 'The cat ran quickly to school.'

Q10. Which word is a verb in the sentence: 'She jumped to the shop'?

Q10. Choose the correct synonym for 'fast'

Q10. Add punctuation: 'what time is it'

Q10. Write a sentence using the word 'because'

Q10. Read the sentence and identify the noun: 'The cat ran quickly to school.'

Q10. Which word is a verb in the sentence: 'She jumped to the shop'?

Q10. Choose the correct synonym for 'fast'

Q10. Add punctuation: 'what time is it'

Q10. Write a sentence using the word 'because'



Q10. Read the sentence and identify the noun: 'The cat ran quickly to school.'

Q10. Which word is a verb in the sentence: 'She jumped to the shop'?

Q10. Choose the correct synonym for 'fast'

Q10. Add punctuation: 'what time is it'

Q10. Write a sentence using the word 'because'

Q10. Read the sentence and identify the noun: 'The cat ran quickly to school.'

Q10. Which word is a verb in the sentence: 'She jumped to the shop'?

Q10. Choose the correct synonym for 'fast'

Q10. Add punctuation: 'what time is it'

Q10. Write a sentence using the word 'because'

Q10. Read the sentence and identify the noun: 'The cat ran quickly to school.'

Q10. Which word is a verb in the sentence: 'She jumped to the shop'?

Q10. Choose the correct synonym for 'fast'

Q10. Add punctuation: 'what time is it'


Q10. Write a sentence using the word 'because'

Section 3: Non-Verbal Reasoning

Q1. Study the pattern below. What comes next?



Q2. Study the pattern below. What comes next?



Q3. Study the pattern below. What comes next?



Q4. Study the pattern below. What comes next?



Q5. Study the pattern below. What comes next?



Q6. Study the pattern below. What comes next?




Q7. Study the pattern below. What comes next?



Q8. Study the pattern below. What comes next?



Q9. Study the pattern below. What comes next?



Q10. Study the pattern below. What comes next?



Q11. Study the pattern below. What comes next?




Q12. Study the pattern below. What comes next?



Q13. Study the pattern below. What comes next?



Q14. Study the pattern below. What comes next?



Q15. Study the pattern below. What comes next?



Q16. Study the pattern below. What comes next?



Q17. Study the pattern below. What comes next?



Q18. Study the pattern below. What comes next?



Q19. Study the pattern below. What comes next?



Q20. Study the pattern below. What comes next?



Q21. Study the pattern below. What comes next?




Q22. Study the pattern below. What comes next?



Q23. Study the pattern below. What comes next?



Q24. Study the pattern below. What comes next?



Q25. Study the pattern below. What comes next?



Q26. Study the pattern below. What comes next?



Q27. Study the pattern below. What comes next?



Q28. Study the pattern below. What comes next?



Q29. Study the pattern below. What comes next?



Q30. Study the pattern below. What comes next?



Q31. Study the pattern below. What comes next?



Q32. Study the pattern below. What comes next?



Q33. Study the pattern below. What comes next?



Q34. Study the pattern below. What comes next?




Q35. Study the pattern below. What comes next?



Q36. Study the pattern below. What comes next?



Q37. Study the pattern below. What comes next?



Q38. Study the pattern below. What comes next?



Q39. Study the pattern below. What comes next?



Q40. Study the pattern below. What comes next?



Q41. Study the pattern below. What comes next?



Q42. Study the pattern below. What comes next?





Q43. Study the pattern below. What comes next?



Q44. Study the pattern below. What comes next?



Q45. Study the pattern below. What comes next?



Q46. Study the pattern below. What comes next?



Q47. Study the pattern below. What comes next?



Q48. Study the pattern below. What comes next?



Q49. Study the pattern below. What comes next?



Q50. Study the pattern below. What comes next?

